

**Q1.** Use the standard electrode potential data in the table below to answer the questions which follow.

			$E^\ominus / V$
$Ce^{4+}(aq) + e^-$	$\rightleftharpoons$	$Ce^{3+}(aq)$	+1.70
$MnO_4^-(aq) + 8H^+(aq) + 5e^-$	$\rightleftharpoons$	$Mn^{2+}(aq) + 4H_2O(l)$	+1.51
$Cl_2(g) + 2e^-$	$\rightleftharpoons$	$2Cl^-(aq)$	+1.36
$VO_2^+(aq) + 2H^+(aq) + e^-$	$\rightleftharpoons$	$VO^{2+}(aq) + H_2O(l)$	+1.00
$Fe^{3+}(aq) + e^-$	$\rightleftharpoons$	$Fe^{2+}(aq)$	+0.77
$SO_4^{2-}(aq) + 4H^+(aq) + 2e^-$	$\rightleftharpoons$	$H_2SO_3(aq) + H_2O(l)$	+0.17

(a) Name the standard reference electrode against which all other electrode potentials are measured.

.....

(1)

(b) When the standard electrode potential for  $Fe^{3+}(aq) / Fe^{2+}(aq)$  is measured, a platinum electrode is required.

(i) What is the function of the platinum electrode?

.....

(ii) What are the standard conditions which apply to  $Fe^{3+}(aq)/Fe^{2+}(aq)$  when measuring this potential?

.....

.....

.....

(3)

(c) The cell represented below was set up under standard conditions.



Calculate the e.m.f. of this cell and write an equation for the spontaneous cell reaction.

Cell e.m.f. ....

Equation .....

.....

(3)

(d) (i) Which one of the species given in the table is the strongest oxidising agent?

.....

(ii) Which of the species in the table could convert  $\text{Fe}^{2+}(\text{aq})$  into  $\text{Fe}^{3+}(\text{aq})$  but could not convert  $\text{Mn}^{2+}(\text{aq})$  into  $\text{MnO}_4^{-}(\text{aq})$ ?

.....

(3)

(e) Use data from the table of standard electrode potentials to deduce the cell which would have a standard e.m.f. of 0.93 V. Represent this cell using the convention shown in part (c).

.....

(2)

(Total 12 marks)

**Q2.** Copper, in the form of nanoparticles of copper(II) hexacyanoferrate(II), has recently been investigated as an efficient method of storing electrical energy in a rechargeable cell.

(a) Solar cells generate an electric current from sunlight. These cells are often used to provide electrical energy for illuminated road signs.

Explain why rechargeable cells are connected to these solar cells.

.....  
.....  
.....  
.....

(2)

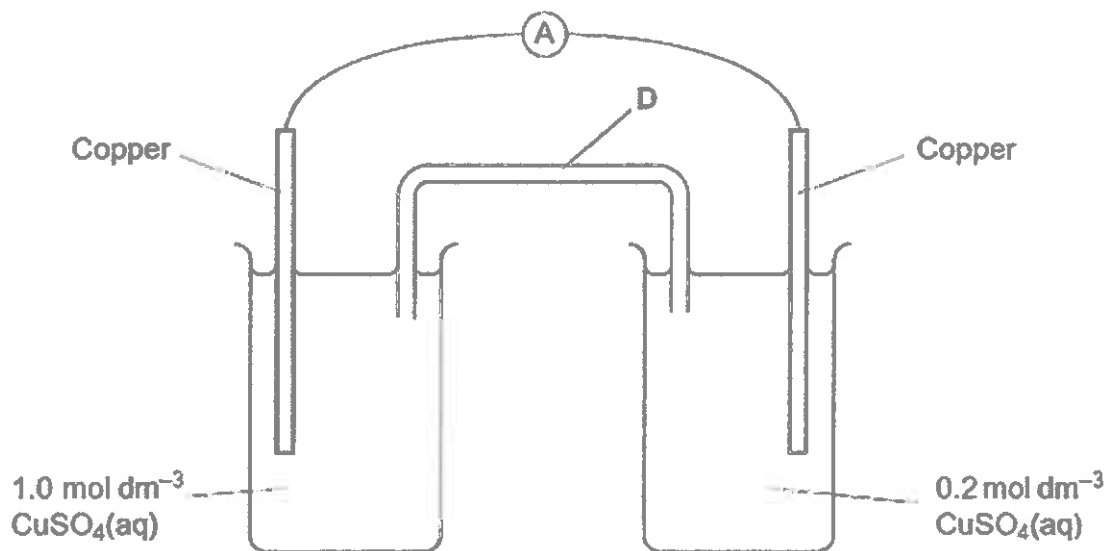
(b) Suggest **one** reason why many waste disposal centres contain a separate section for cells and batteries.

.....  
.....  
.....

(1)

(Total 3 marks)

**Q3.** An electrochemical cell is shown in the diagram. In this cell, the amount of copper in the electrodes is much greater than the amount of copper ions in the copper sulfate solutions.



(a) Explain how the salt bridge **D** provides an electrical connection between the two electrodes.

.....  
 .....

(1)

(b) Suggest why potassium chloride would **not** be a suitable salt for the salt bridge in this cell.

.....  
 .....

(1)

(c) In the external circuit of this cell, the electrons flow through the ammeter from right to left.

Suggest why the electrons move in this direction.

.....  
 .....

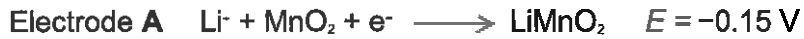
(2)

- (d) Explain why the current in the external circuit of this cell falls to zero after the cell has operated for some time.

.....  
 .....

(1)

- (e) The simplified electrode reactions in a rechargeable lithium cell are



Electrode B is the negative electrode.

- (i) The e.m.f. of this cell is 2.90 V.

Use this information to calculate a value for the electrode potential of electrode B.

.....  
 .....

(1)

- (ii) Write an equation for the overall reaction that occurs when this lithium cell is being recharged.

.....  
 .....

(2)

- (iii) Suggest why the recharging of a lithium cell may lead to release of carbon dioxide into the atmosphere.

.....  
 .....

(1)

(Total 9 marks)

**Q4.** Hydrogen–oxygen fuel cells are used to provide electrical energy for electric motors in vehicles.

(a) In a hydrogen–oxygen fuel cell, a current is generated that can be used to drive an electric motor.

(i) Deduce half-equations for the electrode reactions in a hydrogen–oxygen fuel cell.

Half-equation 1 .....

Half-equation 2 .....

(2)

(ii) Use these half-equations to explain how an electric current can be generated.

.....  
.....  
.....  
.....

(2)

(b) Explain why a fuel cell does **not** need to be recharged.

.....  
.....  
.....

(1)

(c) To provide energy for a vehicle, hydrogen can be used either in a fuel cell or in an internal combustion engine.

Suggest the main advantage of using hydrogen in a fuel cell rather than in an internal combustion engine.

.....  
.....  
.....

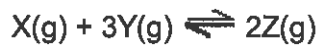
(1)

- (d) Identify **one** major hazard associated with the use of a hydrogen–oxygen fuel cell in a vehicle.

.....  
 .....

(1)  
 (Total 7 marks)

- Q5.** A sealed flask containing gases **X** and **Y** in the mole ratio 1:3 was maintained at 600 K until the following equilibrium was established.



The partial pressure of **Z** in the equilibrium mixture was 6.0 MPa when the total pressure was 22.0 MPa.

- (a) (i) Write an expression for the equilibrium constant,  $K_p$ , for this reaction.

.....  
 .....

- (ii) Calculate the partial pressure of **X** and the partial pressure of **Y** in the equilibrium mixture.

*Partial pressure of X* .....

.....

*Partial pressure of Y* .....

- (iii) Calculate the value of  $K_p$  for this reaction under these conditions and state its units.

*Value of  $K_p$*  .....

.....

.....

*Units of  $K_p$*  .....

(6)

- (b) When this reaction is carried out at 300 K and a high pressure of 100 MPa, rather than at 600 K and 22.0 MPa, a higher equilibrium yield of gas Z is obtained.

Give two reasons why an industrialist is unlikely to choose these reaction conditions.

Reason 1 .....

Reason 2 .....

(2)  
(Total 8 marks)

**Q6.** This question is about the chemical properties of chlorine, sodium chloride and sodium bromide.

- (a) Sodium bromide reacts with concentrated sulfuric acid in a different way from sodium chloride.

Write an equation for this reaction of sodium bromide and explain why bromide ions react differently from chloride ions.

Equation .....

Explanation .....

.....  
.....  
.....

(3)

- (b) A colourless solution contains a mixture of sodium chloride and sodium bromide.

Using aqueous silver nitrate and any other reagents of your choice, develop a procedure to prepare a pure sample of silver bromide from this mixture. Explain each step in the procedure and illustrate your explanations with equations, where appropriate.

.....  
.....  
.....  
.....  
.....  
.....  
.....  
.....  
.....  
.....

(6)

- (c) Write an ionic equation for the reaction between chlorine and cold dilute sodium hydroxide solution.  
Give the oxidation state of chlorine in each of the chlorine-containing ions formed.

.....  
 .....  
 .....

(2)  
 (Total 11 marks)

- Q7.** Compound **A** is an oxide of sulphur. At 415 K, a gaseous sample of **A**, of mass 0.304 g, occupied a volume of 127 cm<sup>3</sup> at a pressure of 103 kPa.

State the ideal gas equation and use it to calculate the number of moles of **A** in the sample, and hence calculate the relative molecular mass of **A**.  
 (The gas constant  $R = 8.31 \text{ J K}^{-1} \text{ mol}^{-1}$ )

*Ideal gas equation* .....

*Calculation* .....

.....  
 .....  
 .....  
 .....

(Total 5 marks)

- Q8.** Which change requires the largest amount of energy?



(Total 1 mark)



**Q9.** A saturated aqueous solution of magnesium hydroxide contains  $1.17 \times 10^{-3}$  g of  $\text{Mg}(\text{OH})_2$  in  $100 \text{ cm}^3$  of solution. In this solution, the magnesium hydroxide is fully dissociated into ions.

What is the concentration of  $\text{Mg}^{2+}(\text{aq})$  ions in this solution?

- A  $2.82 \times 10^{-2} \text{ mol dm}^{-3}$
- B  $2.01 \times 10^{-3} \text{ mol dm}^{-3}$
- C  $2.82 \times 10^{-3} \text{ mol dm}^{-3}$
- D  $2.01 \times 10^{-4} \text{ mol dm}^{-3}$

(Total 1 mark)

**Q10.** The table below shows some information about three hydrochloric acid solutions used to clean bricks and concrete.

Cleaner	Acid content by mass / %	Price per $25 \text{ dm}^3$ / £
Plattam Concrete Acid	24.0	14.39
Dub-Lit Brick Cleaner	28.9	16.99
Conpat Brick Acid	35.9	24.99

Use the data in the table above to determine the cleaner that offers the best value for money, based on acid content. Show your working.

.....

.....

.....

.....

(Total 1 mark)

**Q11.** Which of these pieces of apparatus has the lowest percentage uncertainty in the measurement shown?

- A** Volume of 25 cm<sup>3</sup> measured with a burette with an uncertainty of  $\pm 0.1$  cm<sup>3</sup>.
- B** Volume of 25 cm<sup>3</sup> measured with a measuring cylinder with an uncertainty of  $\pm 0.5$  cm<sup>3</sup>.
- C** Mass of 0.150 g measured with a balance with an uncertainty of  $\pm 0.001$  g.
- D** Temperature change of 23.2 °C measured with a thermometer with an uncertainty of  $\pm 0.1$  °C.

**(Total 1 mark)**